



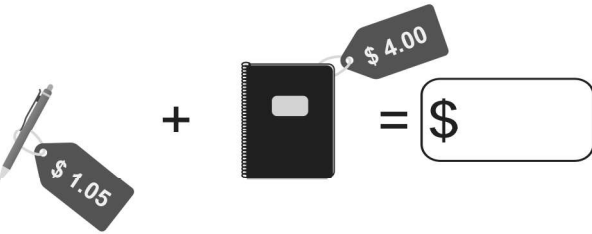





Add the prices of the items, and write the total amount.

<p>1.</p>  $\$10.35 + \$1.65 = \$ \boxed{}$	<p>2.</p>  $\$75.00 + \$50.25 = \$ \boxed{}$
<p>3.</p>  $\$75.63 + \$89.25 = \$ \boxed{}$	<p>4.</p>  $\$10.00 + \$80.25 = \$ \boxed{}$
<p>5.</p>  $\$1.05 + \$4.00 = \$ \boxed{}$	<p>6.</p>  $\$27.35 + \$35.75 = \$ \boxed{}$
<p>7.</p>  $\$20.15 + \$5.05 = \$ \boxed{}$	<p>8.</p>  $\$40.25 + \$10.00 = \$ \boxed{}$