

















Calculate the change obtained after purchasing each items.

<p>1.</p>  <p>You paid </p> <p><input type="text"/></p> <p>You got back.</p>	<p>2.</p>  <p>You paid </p> <p><input type="text"/></p> <p>You got back.</p>
<p>3.</p>  <p>You paid </p> <p><input type="text"/></p> <p>You got back.</p>	<p>4.</p>  <p>You paid </p> <p><input type="text"/></p> <p>You got back.</p>
<p>5.</p>  <p>You paid </p> <p><input type="text"/></p> <p>You got back.</p>	<p>6.</p>  <p>You paid </p> <p><input type="text"/></p> <p>You got back.</p>
<p>7.</p>  <p>You paid </p> <p><input type="text"/></p> <p>You got back.</p>	<p>8.</p>  <p>You paid </p> <p><input type="text"/></p> <p>You got back.</p>