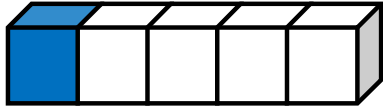
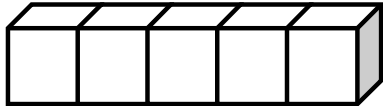
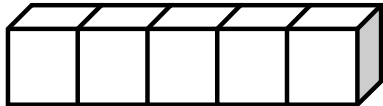
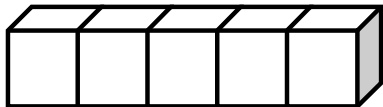
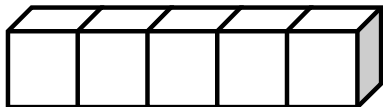
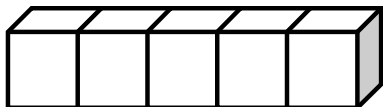


Name: \_\_\_\_\_

Date: \_\_\_\_\_

## Cube Train

Use 2 Colors to make the different combinations of block which adds upto 5 and write the number sentence :

1)		$\boxed{1} + \boxed{4} = \boxed{5}$
2)		$\boxed{\phantom{0}} + \boxed{\phantom{0}} = \boxed{\phantom{0}}$
3)		$\boxed{\phantom{0}} + \boxed{\phantom{0}} = \boxed{\phantom{0}}$
4)		$\boxed{\phantom{0}} + \boxed{\phantom{0}} = \boxed{\phantom{0}}$
5)		$\boxed{\phantom{0}} + \boxed{\phantom{0}} = \boxed{\phantom{0}}$
6)		$\boxed{\phantom{0}} + \boxed{\phantom{0}} = \boxed{\phantom{0}}$