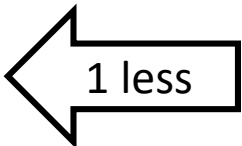
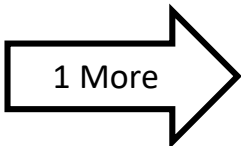
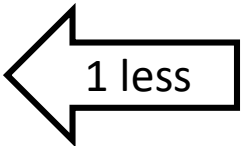
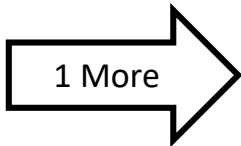
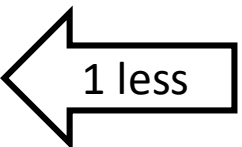
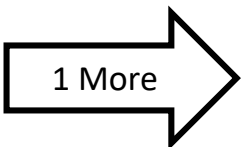
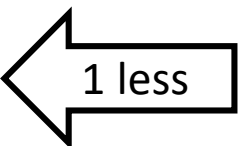
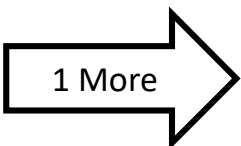


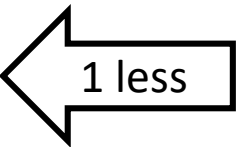
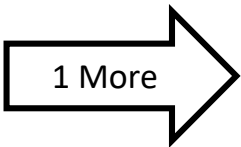
Write the numbers one less and one more than the number shown :

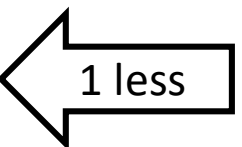
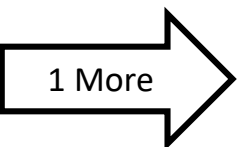
<input type="text"/>	 1 less	42	 1 More	<input type="text"/>
----------------------	--	----	---	----------------------

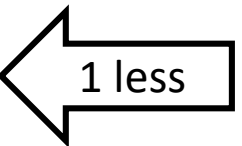
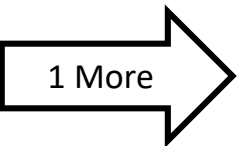
<input type="text"/>	 1 less	51	 1 More	<input type="text"/>
----------------------	--	----	---	----------------------

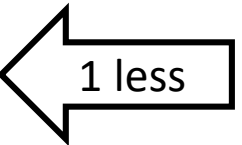
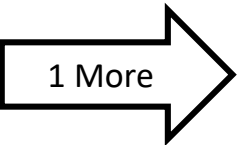
<input type="text"/>	 1 less	33	 1 More	<input type="text"/>
----------------------	--	----	---	----------------------

<input type="text"/>	 1 less	24	 1 More	<input type="text"/>
----------------------	---	----	--	----------------------

<input type="text"/>	 1 less	46	 1 More	<input type="text"/>
----------------------	--	----	---	----------------------

<input type="text"/>	 1 less	81	 1 More	<input type="text"/>
----------------------	--	----	---	----------------------

<input type="text"/>	 1 less	59	 1 More	<input type="text"/>
----------------------	--	----	---	----------------------

<input type="text"/>	 1 less	70	 1 More	<input type="text"/>
----------------------	--	----	---	----------------------